



INDIAN SCHOOL AL WADI AL KABIR
DEPARTMENT OF SOCIAL SCIENCE
Pre Mid Term Examination 2025-26

SET-2

CLASS: VI

Max: Marks: 30


Date: 20/05/2025




Time: 1 Hour.

General Instruction

1. Ensure that you have written your name and roll number correctly.
2. This Question paper has two parts, **Section A (History) & B (Geography)**.
3. All questions are compulsory.
4. All the answers must be correctly numbered as in the question paper in the Answer sheet provided.

	SECTION – A (History) 15 Marks				
I	Choose the correct option and write on your answer paper : -				4 Marks
1	What is the full form of CE?				1 Mark
	(a) Common Era	(b) Central Era	(c) Common Eagle	(d) Corner Era	
2	Carbon-14 dating is used to determine the age of:				1 Mark
	(a) Radio	(b) Newspaper	(c) Fossils and artifacts	(d) Writing	
3	What are modern humans called?				1 Mark
	(a) House Sapiens	(b) Homo Sapeins	(c) Homo Special	(d) Himi Sapeins	
4	A person who studies and writes about the past.				1 Mark
	(a) Author	(b) Historian	(c) Chieftain	(d) Doctor	
II	Fill in the blanks: -				3 Marks
5	The period before the invention of writing is called _____.				1 Mark
6	A life that begins after death is called _____.				1 Mark
7	_____ is a period of 100 years.				1 Mark

III	Match the following: -				2 Marks
	Column A		Column B		
8	Welfare		a. Before Common Era		1 Mark
9	Auspicious		b. Health, prosperity and well-being.		1 Mark
			c. favorable or bringing luck		
IV	Answer in one or two sentence:-				2 Marks
10	Define an 'Era'.				1 Mark
11	Who contributes to the various sources of history?				1 Mark
V	Answer the following: -				2 Marks
12	How did early humans live?				2 Marks
VI	Observe the picture given below and answer the following questions: -				2 Marks
13	<div></div> <div>a. Which metal is used to prepare this coin? b. What does this coin depict?</div>				<div>1 Mark 1 Mark</div>
	SECTION – B (Geography) 15 Marks				
VII	Choose the correct option and write on your answer paper : -				2 Marks
1	The time difference between two locations for every 15° of longitude is _____.				1 Mark
	(a) 2 Hours	(b) 3 Hours	(c) 1 Hour	(d) 4 Hours	
2	What is the full form of IST?				1 Mark

	(a) Indian Standard Time	(b) International Standard Time	(c) Indian Symbol Time	(d) Indian Standard Tour	
VIII	Fill in the blanks: -				2 Marks
3	The latitude that divides the earth into two equal halves is called _____.				1 Mark
4	The different components of the map are distance,_____ and symbols.				1 Mark
IX	Match the following: -				2 Marks
	Column A	Column B			
5	Metalled road	a. 			1 Mark
6	Trees	b. 			1 Mark
		c. 			
X	Answer in one or two sentence:-				4 Marks
7	Name the '0' degree longitude.				1 Mark
8	What is a grid?				1 Mark
9	Name the cardinal directions.				1 Mark
10	Why are maps useful?				1 Mark
XI	Answer the following: -				2 Marks
11	How do coordinates help in locating places?				2 Marks
XII	Answer in brief: -				3 Marks
12	Draw and colour a neat diagram of the earth and label the following with the angles: - a) Equator b) Prime Meridian c) Tropic of Cancer				3 Marks